

Half-yearly assessment

Name : _____

Whole Number

Understanding: **Limited** **Basic** **Sound**

1. Rewrite these numbers with the correct spacing

a) 839 0348 8 390 348

b) 2387 3402 8 238 734 028

2. What is the place value of the numerals in bold type?

a) 834 **854** 293 hundred thousand

b) **723** 724 083 ten million

3. Rewrite these numbers in order from smallest to largest.

76 236, 92 873, 25 637, 50 734

25637, 50734, 76236, 92873

Addition and Subtraction

Understanding: **Limited** **Basic** **Sound**

4. Write an addition problem using the numbers 8300 and 2568. Then solve your problem.

Students' answers will vary.

10,868

5. Solve the following subtractions, writing how you solved them in the space provided.

a) $703 - 368 =$ 335

Students' answers will vary.

b) $6205 - 4097 =$ 2108

Students' answers will vary.

Multiplication and Division

Understanding: **Limited** **Basic** **Sound**

6. Write an estimate for the following problems.

a) $73 \times 28 =$ 2100

b) $834 \times 52 =$ 40000

7. Complete the following.

$\overline{)735}$ OR $734 \div \overline{)5}$ OR $\overline{)5} \overline{)735}$


8. Matthew purchases a lawnmower using a lay-by system. He makes 3 equal payments of \$418. How much did the lawnmower cost?

\$1254

Fractions and Decimals

Understanding: **Limited** **Basic** **Sound**

9. Complete the following.



- a) $\frac{3}{4}$ of 24 = c) $\frac{5}{6}$ of 24 =
- b) $\frac{2}{3}$ of 24 = d) $\frac{7}{12}$ of 24 =

10. Complete the following by inserting $<$, $>$ or $=$ in the space provided.

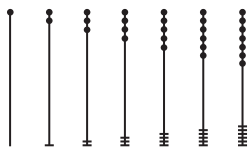
- a) $\frac{3}{12}$ $\frac{9}{12}$ c) $\frac{2}{3}$ $\frac{11}{12}$
- b) $\frac{1}{6}$ $\frac{1}{3}$ d) $\frac{1}{4}$ $\frac{3}{12}$

Patterns and Algebra

Understanding: **Limited** **Basic** **Sound**

11.

- a) Draw the next 3 items in this pattern.



- b) Using the pattern above complete the table below and graph the points.

Number of dots	1	2	3	4
Number of lines	0	1	2	3

- c) Describe the pattern that links the number of dots to the number of lines.

Number of dots minus one = number of lines

- d) If there are 13 dots, how many lines will there be? 12
- e) If there are 27 lines, how many dots are there? 28

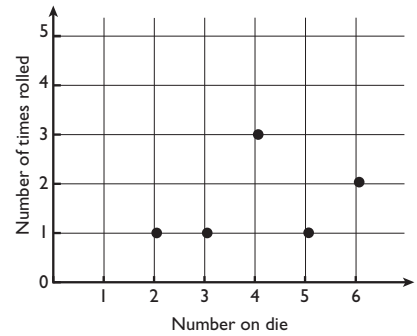
Data

12. A die was rolled 10 times and the score was recorded below.

5, 6, 6, 1, 2, 4, 3, 3, 3, 5

a) Present these results in a table and on a dot plot.

Number on Die	Roll Tally	Total
1		1
2		1
3		3
4		1
5		2
6		2



b) What is the mode? 3

c) What is the median of this data set? 3.5

Length

Understanding: Limited Basic Sound

13. What unit would you use to measure the length of the following?

a) A swimming pool m b) The Murray River km

14. How many of the following items would you need to line up end-to-end to have a length of 1 km?

a) A 100 m long football field 10 b) A 4 m long mini-van 250

15. How far has this vehicle travelled?

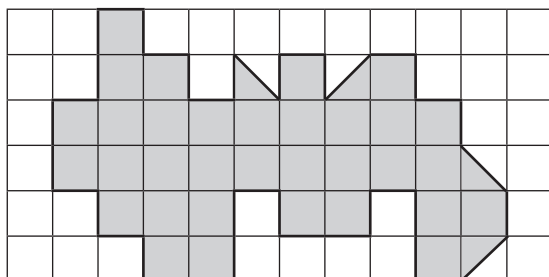


18765 km

Area

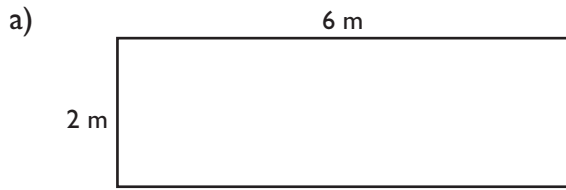
Understanding: Limited Basic Sound

16. Each grid square represents 1 hectare. What is the area of the shape?

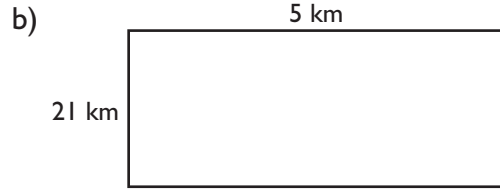


35 hectares

17. Calculate the area of these rectangles, showing how you did it in the space provided.



$$6 \times 2 = 12m^2$$




$$21 \times 5 = 105km^2$$


Mass and Temperature

Understanding: Limited Basic Sound

18. Circle the most likely mass for each object.

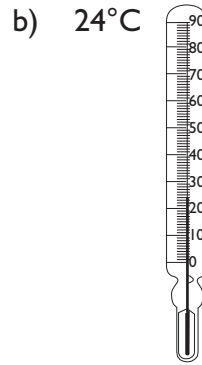



400 kg 4 t 40 t



300 kg 3 t 30 t

19. Record on the thermometers the temperature that is indicated.



Time

Understanding: Limited Basic Sound

20. Use the program to answer the questions.

10:00 a.m.	Dog trials
12:00 p.m.	Cattle parade
12:30 p.m.	Marching band competition
2:00 p.m.	Show jumping
4:30 p.m.	Moto-X display

a) What time is the cattle parade? 12:00 pm

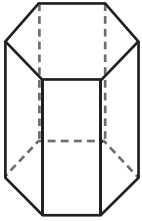
b) If I arrive at 1330 hrs and leave at 1500 hrs, what will I see?

Show Jumping

Shape

Understanding: Limited Basic Sound

21. Marta says that this shape is a rectangular prism, but Dana says that it is a hexagonal prism.



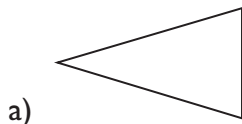
Who do you agree with and why?

Dana - both ends of the prisms are hexagons

Geometric Reasoning

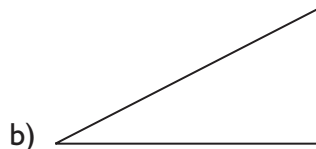
Understanding: Limited Basic Sound

22. Identify the types of triangles below. Then explain how you determined what sort of triangles these were.



Scalene triangle

(no equal sides)



Right - angled


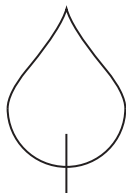

triangle

(there is a right angle)

Transformation

Understanding: Limited Basic Sound

23. Colour the shapes that have rotational symmetry.



Location

Understanding:

Limited

Basic

Sound

24. A B C D E F

1	○					
2		☹		△		☺
3			🌸			
4		□			●	
5						
6			▲			■

- a) Label the grid above.
- b) In which grid square will you find:
- the smiling face? F2
 - the black triangle? C6
- c) Draw a flower in the grid square D3.
- d) What object is 3 spaces to the left of the black circle? White square